

**Sub-Math**  
**Branch - All Branch**

---

1. Answer any two questions. [10x2]

a) Prove without expanding that

$$\begin{vmatrix} 1+a & 1 & 1 \\ 1 & 1+b & 1 \\ 1 & 1 & 1+c \end{vmatrix} = abc \left( 1 + \frac{1}{a} + \frac{1}{b} + \frac{1}{c} \right)$$

b) Solve the given equations by matrix method

$$x-y+z=4, 2x+y-3z=0, x+y+z=2$$

c) Resolve into partial fractions

$$\frac{x^2}{(x+1)^2(x-2)}$$

d) Find the square roots of  $-15-8i$

**Sub-Math**  
**Branch - All Branch**

---

1. Answer any two questions. [10x2]

a) Prove without expanding that

$$\begin{vmatrix} 1+a & 1 & 1 \\ 1 & 1+b & 1 \\ 1 & 1 & 1+c \end{vmatrix} = abc \left( 1 + \frac{1}{a} + \frac{1}{b} + \frac{1}{c} \right)$$

b) Solve the given equations by matrix method

$$x-y+z=4, 2x+y-3z=0, x+y+z=2$$

c) Resolve into partial fractions

$$\frac{x^2}{(x+1)^2(x-2)}$$

d) Find the square roots of  $-15-8i$

**Sub-Math**  
**Branch - All Branch**

---

1. Answer any two questions. [10x2]

a) Prove without expanding that

$$\begin{vmatrix} 1+a & 1 & 1 \\ 1 & 1+b & 1 \\ 1 & 1 & 1+c \end{vmatrix} = abc \left( 1 + \frac{1}{a} + \frac{1}{b} + \frac{1}{c} \right)$$

b) Solve the given equations by matrix method

$$x-y+z=4, 2x+y-3z=0, x+y+z=2$$

c) Resolve into partial fractions

$$\frac{x^2}{(x+1)^2(x-2)}$$

d) Find the square roots of  $-15-8i$

**Sub-Math**  
**Branch - All Branch**

---

1. Answer any two questions. [10x2]

a) Prove without expanding that

$$\begin{vmatrix} 1+a & 1 & 1 \\ 1 & 1+b & 1 \\ 1 & 1 & 1+c \end{vmatrix} = abc \left( 1 + \frac{1}{a} + \frac{1}{b} + \frac{1}{c} \right)$$

b) Solve the given equations by matrix method

$$x-y+z=4, 2x+y-3z=0, x+y+z=2$$

c) Resolve into partial fractions

$$\frac{x^2}{(x+1)^2(x-2)}$$

d) Find the square roots of  $-15-8i$

**Sub-Engg. Chemistry**  
**Branch - Mech. & Auto. Engg.**

---

**Answer any four questions.**

**[5x4]**

1. Define a) Calcinations      b) Roasting c) Smelting
2. Explain the factors that influence the rate of corrosion.
3. What are alloys ? Write the composition and uses of brass and Duralumin.
4. Define the process of electroplating.
5. What is homologous series ? Write the characteristic of a homologous series.

**Sub-Engg. Chemistry**  
**Branch - Mech. & Auto. Engg.**

---

**Answer any four questions.**

**[5x4]**

1. Define a) Calcinations      b) Roasting c) Smelting
2. Explain the factors that influence the rate of corrosion.
3. What are alloys ? Write the composition and uses of brass and Duralumin.
4. Define the process of electroplating.
5. What is homologous series ? Write the characteristic of a homologous series.

**Sub-Engg. Chemistry**  
**Branch - Mech. & Auto. Engg.**

---

**Answer any four questions.**

**[5x4]**

1. Define a) Calcinations      b) Roasting c) Smelting
2. Explain the factors that influence the rate of corrosion.
3. What are alloys ? Write the composition and uses of brass and Duralumin.
4. Define the process of electroplating.
5. What is homologous series ? Write the characteristic of a homologous series.

**Sub-Engg. Chemistry**  
**Branch - Mech. & Auto. Engg.**

---

**Answer any four questions.**

**[5x4]**

1. Define a) Calcinations      b) Roasting c) Smelting
2. Explain the factors that influence the rate of corrosion.
3. What are alloys ? Write the composition and uses of brass and Duralumin.
4. Define the process of electroplating.
5. What is homologous series ? Write the characteristic of a homologous series.

**Sub-Basic Electrical Engg.  
Branch - Elect. & Civil Engg.**

- 
1. Answer all questions. (any five) [2x5]
- a) What are the necessity of earthing ?
  - b) Write the types of wiring & definition of wiring.
  - c) State the advantages of nuclear power station.
  - d) Write definition of measuring, instruments.
  - e) What are the types of instrument ?
2. Answer all questions. (any five) [5x2]
- a) Discuss briefly about wind energy.
  - b) Discuss about nuclear power station briefly.
  - c) A building has following electrical applications i) 1 HP motor running for 5 hrs in a day ii) 3 fans each of 80w running for 10 hrs in a day iii) 4 tube lights of 40w running for 15 hrs per day. Find monthly bill for month of November if unit cost of bill is Rs. 2.50.

**Sub-Basic Electrical Engg.  
Branch - Elect. & Civil Engg.**

- 
1. Answer all questions. (any five) [2x5]
- a) What are the necessity of earthing ?
  - b) Write the types of wiring & definition of wiring.
  - c) State the advantages of nuclear power station.
  - d) Write definition of measuring, instruments.
  - e) What are the types of instrument ?
2. Answer all questions. (any five) [5x2]
- a) Discuss briefly about wind energy.
  - b) Discuss about nuclear power station briefly.
  - c) A building has following electrical applications i) 1 HP motor running for 5 hrs in a day ii) 3 fans each of 80w running for 10 hrs in a day iii) 4 tube lights of 40w running for 15 hrs per day. Find monthly bill for month of November if unit cost of bill is Rs. 2.50.

**Sub-Physics**  
**Branch - Civil & Elect. Engg.**

- 
1. Answer all the questions. [1x5]
- a) Value of Joule's Mechanical equivalent of heat = \_\_\_\_\_  
Joule/Cal.
- b) What is the horizontal range of a projectile fired vertically upward ?
- c) Write down the relation between  $\beta$  &  $\gamma$ .
- d) What is the shape of the trajectory of a projectile ?
- e) Write down the relation between force of friction & normal reaction.
2. Answer all the questions. [2x4]
- a) What do you mean by force of limiting friction ?
- b) Define total internal reflection, write one application of total internal reflection.
- c) The refractive index of glass & water are 1.5 & 1.3 respectively, What is the critical angle when the ray passes from glass to water ?
- d) Define co-efficient of cubical expansion.
3. Derive Mayer's formula (Relation between  $C_p$  &  $C_v$ ) for 1 mole of an ideal gas. [7]

**Or**

Derive expression for equation of trajectory, time of descent, horizontal range of a projectile fired horizontally.

**Sub-Physics**  
**Branch - Civil & Elect. Engg.**

- 
1. Answer all the questions. [1x5]
- a) Value of Joule's Mechanical equivalent of heat = \_\_\_\_\_  
Joule/Cal.
- b) What is the horizontal range of a projectile fired vertically upward ?
- c) Write down the relation between  $\beta$  &  $\gamma$ .
- d) What is the shape of the trajectory of a projectile ?
- e) Write down the relation between force of friction & normal reaction.
2. Answer all the questions. [2x4]
- a) What do you mean by force of limiting friction ?
- b) Define total internal reflection, write one application of total internal reflection.
- c) The refractive index of glass & water are 1.5 & 1.3 respectively, What is the critical angle when the ray passes from glass to water ?
- d) Define co-efficient of cubical expansion.
3. Derive Mayer's formula (Relation between  $C_p$  &  $C_v$ ) for 1 mole of an ideal gas. [7]

**Or**

Derive expression for equation of trajectory, time of descent, horizontal range of a projectile fired horizontally.

**Sub- Comm. English  
Branch - All Branch**

- 
1. Answer any five questions. [5x2]  
a) Who is Khairi ?  
b) Who is the foster father of Khairi ?  
c) What experience did the author have in the Tiger Reserve area ?  
d) What kind of family and Mr. Choudhiry have ?  
e) What is the personality of Soraj Raj Chaudhury ?  
f) Explain-‘She was not Pretty but was beatiful’.
2. Do as directed. [5x2]  
a) Identify the tense.  
They have been living in this town for the last 20 years.  
b) \_\_\_\_\_earth moves round the sun. (Supply the correct article)  
c) \_\_\_\_\_of us went to see the famous actor. (Much/Many)  
d) Geeta lived in Delhi since 1990. (Correct the sentence)  
e) You \_\_\_\_\_speak the truth. (Supply correct modal verb)

**Sub- Comm. English  
Branch - All Branch**

- 
1. Answer any five questions. [5x2]  
a) Who is Khairi ?  
b) Who is the foster father of Khairi ?  
c) What experience did the author have in the Tiger Reserve area ?  
d) What kind of family and Mr. Choudhiry have ?  
e) What is the personality of Soraj Raj Chaudhury ?  
f) Explain-‘She was not Pretty but was beatiful’.
2. Do as directed. [5x2]  
a) Identify the tense.  
They have been living in this town for the last 20 years.  
b) \_\_\_\_\_earth moves round the sun. (Supply the correct article)  
c) \_\_\_\_\_of us went to see the famous actor. (Much/Many)  
d) Geeta lived in Delhi since 1990. (Correct the sentence)  
e) You \_\_\_\_\_speak the truth. (Supply correct modal verb)

**Sub- Comm. English  
Branch - All Branch**

- 
1. Answer any five questions. [5x2]  
a) Who is Khairi ?  
b) Who is the foster father of Khairi ?  
c) What experience did the author have in the Tiger Reserve area ?  
d) What kind of family and Mr. Choudhiry have ?  
e) What is the personality of Soraj Raj Chaudhury ?  
f) Explain-‘She was not Pretty but was beatiful’.
2. Do as directed. [5x2]  
a) Identify the tense.  
They have been living in this town for the last 20 years.  
b) \_\_\_\_\_earth moves round the sun. (Supply the correct article)  
c) \_\_\_\_\_of us went to see the famous actor. (Much/Many)  
d) Geeta lived in Delhi since 1990. (Correct the sentence)  
e) You \_\_\_\_\_speak the truth. (Supply correct modal verb)

**Sub- Comm. English  
Branch - All Branch**

- 
1. Answer any five questions. [5x2]  
a) Who is Khairi ?  
b) Who is the foster father of Khairi ?  
c) What experience did the author have in the Tiger Reserve area ?  
d) What kind of family and Mr. Choudhiry have ?  
e) What is the personality of Soraj Raj Chaudhury ?  
f) Explain-‘She was not Pretty but was beatiful’.
2. Do as directed. [5x2]  
a) Identify the tense.  
They have been living in this town for the last 20 years.  
b) \_\_\_\_\_earth moves round the sun. (Supply the correct article)  
c) \_\_\_\_\_of us went to see the famous actor. (Much/Many)  
d) Geeta lived in Delhi since 1990. (Correct the sentence)  
e) You \_\_\_\_\_speak the truth. (Supply correct modal verb)

**Sub-Basic Electronics Engg.  
Branch - Mech. & Auto. Engg.**

---

1. Answer any one questions. [1x10]
  - a) Drive the relations between  $\alpha, \beta, \gamma$  where symbols have their usual meaning.
  - b) Explain the block diagram of CRO, how the measure frequency and amplitude using CRO.
2. Answer all the questions. [5x2]
  - a) Explain the full wave rectifier centre tapped method with neat circuit diagram.
  - b) How Zenor diode act as a voltage regulator explain ?

**Sub-Basic Electronics Engg.  
Branch - Mech. & Auto. Engg.**

---

1. Answer any one questions. [1x10]
  - a) Drive the relations between  $\alpha, \beta, \gamma$  where symbols have their usual meaning.
  - b) Explain the block diagram of CRO, how the measure frequency and amplitude using CRO.
2. Answer all the questions. [5x2]
  - a) Explain the full wave rectifier centre tapped method with neat circuit diagram.
  - b) How Zenor diode act as a voltage regulator explain ?

**Sub-Basic Electronics Engg.  
Branch - Mech. & Auto. Engg.**

---

1. Answer any one questions. [1x10]
  - a) Drive the relations between  $\alpha, \beta, \gamma$  where symbols have their usual meaning.
  - b) Explain the block diagram of CRO, how the measure frequency and amplitude using CRO.
2. Answer all the questions. [5x2]
  - a) Explain the full wave rectifier centre tapped method with neat circuit diagram.
  - b) How Zenor diode act as a voltage regulator explain ?

**Sub-Basic Electronics Engg.  
Branch - Mech. & Auto. Engg.**

---

1. Answer any one questions. [1x10]
  - a) Drive the relations between  $\alpha, \beta, \gamma$  where symbols have their usual meaning.
  - b) Explain the block diagram of CRO, how the measure frequency and amplitude using CRO.
2. Answer all the questions. [5x2]
  - a) Explain the full wave rectifier centre tapped method with neat circuit diagram.
  - b) How Zenor diode act as a voltage regulator explain ?

**Sub-Computer Application  
Branch - Mech. & Auto. Engg.**

---

1. Answer any four questions. [5x4]
- a) What is memory hierarchy ? Explain the main features of the various types memory present at different level of the hierarchy.
  - b) Explain the working of a digital computer with a functional block diagram.
  - c) Define operating system. Discuss about measure function & type of operating system.
  - d) Discuss about types of software.
  - e) Different between the complier and interpreter.

**Sub-Computer Application  
Branch - Mech. & Auto. Engg.**

---

1. Answer any four questions. [5x4]
- a) What is memory hierarchy ? Explain the main features of the various types memory present at different level of the hierarchy.
  - b) Explain the working of a digital computer with a functional block diagram.
  - c) Define operating system. Discuss about measure function & type of operating system.
  - d) Discuss about types of software.
  - e) Different between the complier and interpreter.

**Sub-Computer Application  
Branch - Mech. & Auto. Engg.**

---

1. Answer any four questions. [5x4]
- a) What is memory hierarchy ? Explain the main features of the various types memory present at different level of the hierarchy.
  - b) Explain the working of a digital computer with a functional block diagram.
  - c) Define operating system. Discuss about measure function & type of operating system.
  - d) Discuss about types of software.
  - e) Different between the complier and interpreter.

**Sub-Computer Application  
Branch - Mech. & Auto. Engg.**

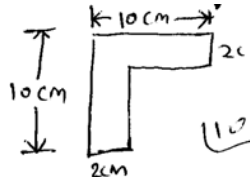
---

1. Answer any four questions. [5x4]
- a) What is memory hierarchy ? Explain the main features of the various types memory present at different level of the hierarchy.
  - b) Explain the working of a digital computer with a functional block diagram.
  - c) Define operating system. Discuss about measure function & type of operating system.
  - d) Discuss about types of software.
  - e) Different between the complier and interpreter.

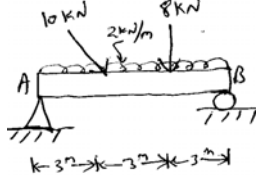
**Sub-Engg. Mechanics**  
Branch - Civil & Elect. Engg.

1. Answer all the questions. [10x2]

a) Determine the C.G. of following L-section.



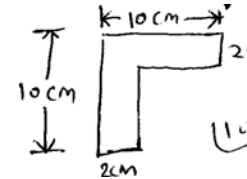
b) Determine the reactions of point A & B.



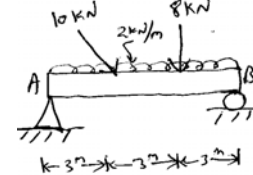
**Sub-Engg. Mechanics**  
Branch - Civil & Elect. Engg.

1. Answer all the questions. [10x2]

a) Determine the C.G. of following L-section.



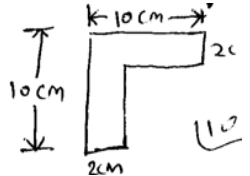
b) Determine the reactions of point A & B.



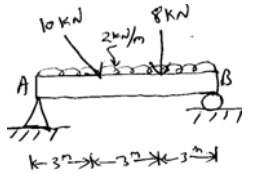
**Sub-Engg. Mechanics**  
Branch - Civil & Elect. Engg.

1. Answer all the questions. [10x2]

a) Determine the C.G. of following L-section.



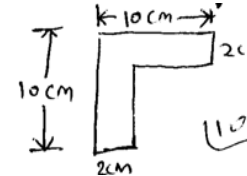
b) Determine the reactions of point A & B.



**Sub-Engg. Mechanics**  
Branch - Civil & Elect. Engg.

1. Answer all the questions. [10x2]

a) Determine the C.G. of following L-section.



b) Determine the reactions of point A & B.

